


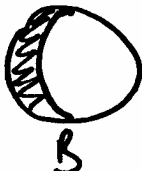
1

□ SVÍTÍ

■ NESVÍTÍ



A



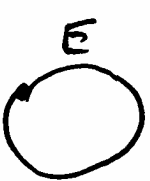
B



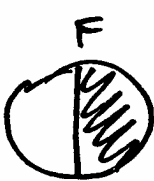
C



D



E



F



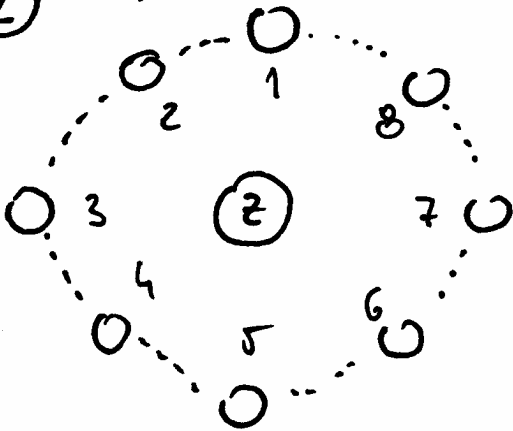
G



H

SEŘAĎ FÁZE OD NOUV

2 DOPLŇ TABULKU



A



B



C



D



E



F



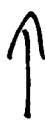
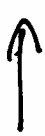
G



H







□ SVÍTÍ

■ NESVÍTÍ



2
6
7
5

A
C
E
H



3.) Zjistí, které z daných situací mohou nastat a které nikoli. Černé plochy na měsících nesvítí.

Řešení:

1.) D-A-C-B-E-H-F-G-D 2.) 2F - 6G - 7D - 5B - A1 - C3 - E4 - H8

3.) I ANO, II NE, III NE, IV ANO, V ANO, VI NE, VII NE, VIII NE